








# Clocks

**NOTE** Students practice telling time to the hour.

SMH 134

1. Read each clock and write the time.



2. What is the same about all of these clocks?  
Why? (Hint: Look at the big hand.) Write your  
answer on another sheet of paper.